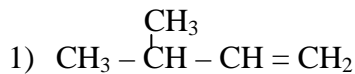


Name \_\_\_\_\_

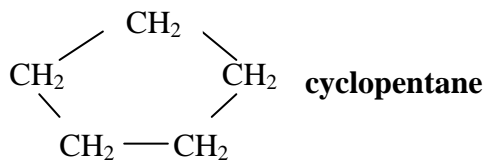
## Organic Nomenclature #1

Write the names for the following compounds:

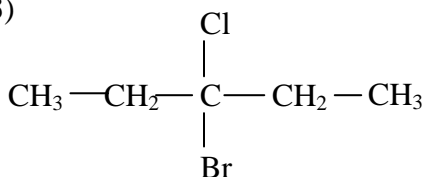


**3 methyl 1 butene**

2)

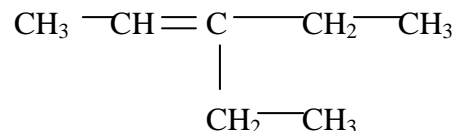


3)



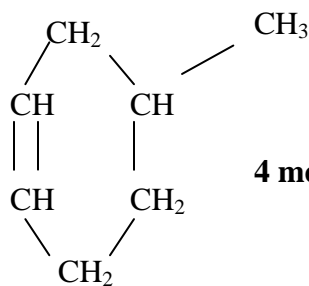
**3 bromo 3 chloro pentane**

4)



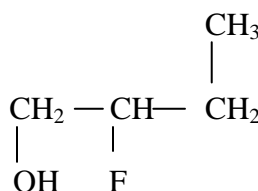
**3 ethyl 2 pentene**

5)



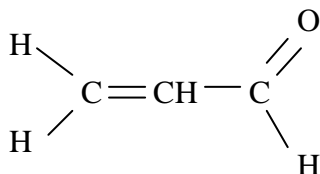
**4 methyl cyclohexene**

6)



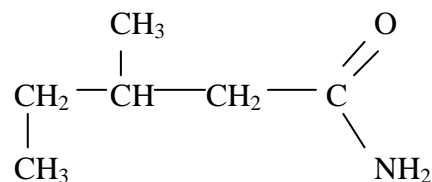
**2 fluoro 1 butanol**

7)



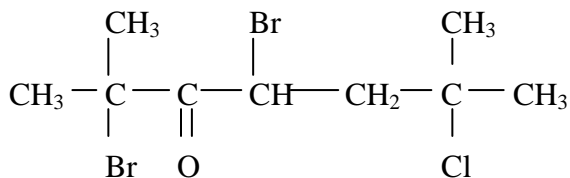
**propenal**

8)



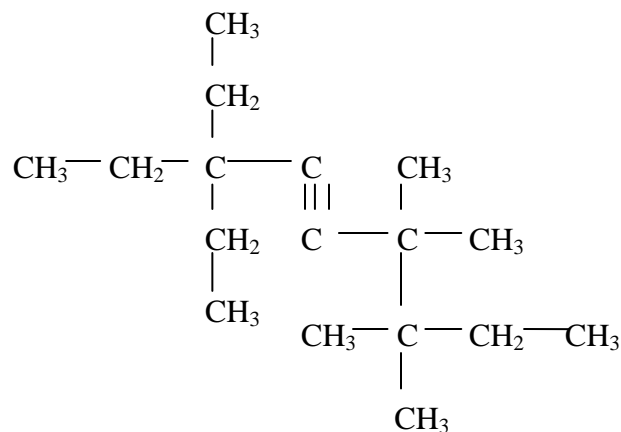
**3 methyl pentanamide**

9)

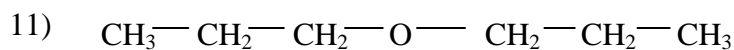


**2,4 dibromo 6 chloro 2,6 dimethyl 3 heptanone**

10)



**3,3 diethyl 6,6,7,7 tetramethyl 4 nonyne**



**dipropyl ether**